

Name: \_\_\_\_\_

Date: \_\_\_\_\_

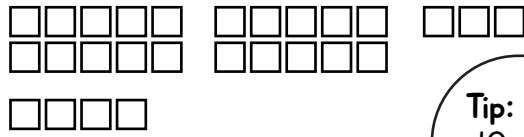
## Count and Add Blocks

*Directions:* Count the blocks, and then write how many there are.

*Example:*

$$\begin{array}{r} 23 \\ + 4 \\ \hline \end{array}$$

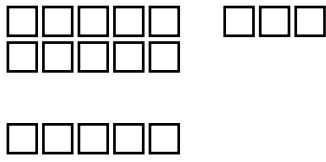
27 in all



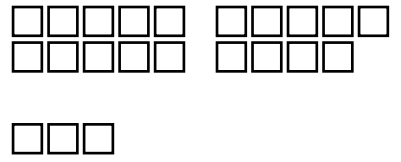
**Tip:** Write the number 10 above each group of 10 blocks.



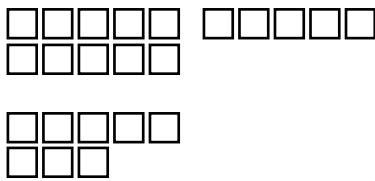
$$\begin{array}{r} 13 \\ + 5 \\ \hline \end{array}$$



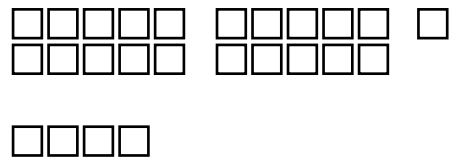
$$\begin{array}{r} 19 \\ + 3 \\ \hline \end{array}$$



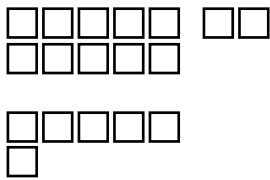
$$\begin{array}{r} 15 \\ + 8 \\ \hline \end{array}$$



$$\begin{array}{r} 21 \\ + 4 \\ \hline \end{array}$$



$$\begin{array}{r} 12 \\ + 6 \\ \hline \end{array}$$



$$\begin{array}{r} 17 \\ + 2 \\ \hline \end{array}$$

